

Q. I. A] Fill in the blanks by choosing the correct word from the bracket:-

5

(children, chicks, kitchen, bell, morning)

- 1) It was Sunday _____.
- 2) The little red hen called her _____.
- 3) Grandpa, Rohan and Sania work in the _____.
- 4) There was a small _____ on the bicycle.
- 5) The library had many books for _____.

B] Give opposites:

3

- 1) up x _____ 2) open x _____ 3) front x _____

C] Circle the correct word:

4

- 1) Raju brushes his (clothes / teeth)
- 2) Use the (monkey / zebra) crossing.
- 3) Raju was (playing / lying) in his bed.
- 4) Get ready to start when it turns (green / yellow)

Q. II. A] Give rhyming words:

4

- 1) well = _____ 2) look = _____ 3) red = _____
- 4) fix = _____

B] Find the smaller word in:

4

- 1) friend = _____ 2) again = _____
- 3) children = _____ 4) today = _____

C] Make a new word by adding a letter to the given word:

3

- 1) buy - _____ 2) you - _____ 3) all - _____

Q.III. A] Complete the given word by filling in the missing letters:

5

- 1) f__ o__ r 2) b__ n__ n a 3) o__ e__
- 4) bi__ y c__ e 5) w h__ e l__

B] Who said to whom ?

2

1) "But I cannot stop."

Ans: _____

2) "You get cherries only in summer."

Ans: _____

C) Make sentences :

2

1) kind - _____

2) mother - _____

Q.IV.A] Answer the following:

6

1) Where did the snail live?

Ans: _____

2) Who is wearing boots and a hat in the play ?

Ans: _____

3) What is a baby kangaroo called ?

Ans: _____

B] Complete the following sentences :

2

1) Rohan and Sania are going with their _____

2) A swan's babies usually swim _____


Grammar

QI Do as directed:


2

1. Rearrange the letters below each picture to get the correct word:

a)



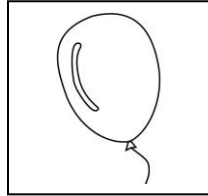
b)



steki = _____

toba = _____

2. Write 'He', 'She', or 'It':



1

_____ is a balloon.

3. Rewrite the sentence using capital letter and a full-stop:

1

the aeroplane flies in the sky

4. Fill in the blanks with the correct word:

1

The ball is _____ the table [in/under]



5. Underline the describing word:

1

He has a long ruler.

6. Fill in the blank with 'This' or 'That':

1

a)




_____ is a flower.

b) Fill in the blank with 'These' or 'Those':

1

_____ are stars.



7. Pick out the smaller word hidden and write it down:

1

cup-_____

8. Underline the conjunction:

1

Tom and lily has a pony.

9. Rearrange the words to form a sentence and rewrite it with a capital letter and a full - stop:

name is my Rahul

Ans: _____.

gives the sun us light

Ans: _____.

10. Cross out [x] the wrong word in the bracket and put a tick mark [✓] for the right word: 1

A duck (quacks / chirp)

II. Observe the picture and write two sentences on it: 2

1. _____

2. _____

B] Write five sentences on 'The sun' or 'My mother' 5

1. _____

2. _____

3. _____

4. _____

5. _____

All the best

Thakur Educational Trust's (Regd.)
THAKUR VIDYA MANDIR HIGH SCHOOL & JUNIOR COLLEGE
III Terminal Examination 2015-16
Subject : Mathematics

NAME _____ Std: I DIV. _____

Roll NO.: _____

DATE - 07 / 04 / 2016

MARKS: 60

Q IA] Fill in the blanks:

(5)

- 1) If today is Tuesday then tomorrow will be _____.
- 2) 4 tens and 5 units is _____.
- 3) If yesterday was Thursday, then today is _____.
- 4) $5 \times 3 =$ _____
- 5) 10 tens are _____

Q I B] Put (✓) or (x) for the following:

(5)

- 1) $6 + 1 = 7$
- 2) The number 19 comes between 18 and 20.
- 3) The number 10 is bigger than number 11.
- 4) $5 - 3 = 3$
- 5) The number formed by interchanging the digits of 87 is 78

Q II A] Write in words:

- a) 125 - _____
- b) 98 - _____
- c) 13 - _____

Q II B] Write in numerals:

(3)

- 1) One hundred and seven - _____
- 2) Forty eight - _____
- 3) Twenty - _____

Q II C] Match the following:

(4)

- | | |
|-------------------------|-------|
| 1) The number before 66 | a) 16 |
| 2) 4×4 | b) 90 |
| 3) 1 more than 89 | c) 76 |
| 4) The number after 75 | d) 65 |

Ans: 1 _____ 2 _____ 3 _____ 4 _____.

QIII] Do as directed:

- 1) Draw additional sticks to make the given number :

(1)

35

2) Count the tens and ones and write the number :

(1)



3) Arrange the numbers in serial order :


(1)

48, 46, 49, 47



4) Write the missing numbers from 93 to 98:


(4)



QIV] Do as directed:

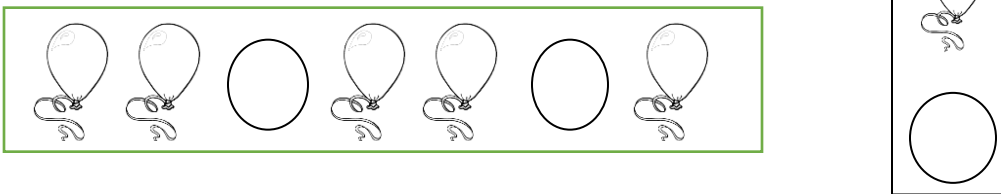
(4)

1) Join the number to the correct box :




2) Ring the object that comes next:

(1)



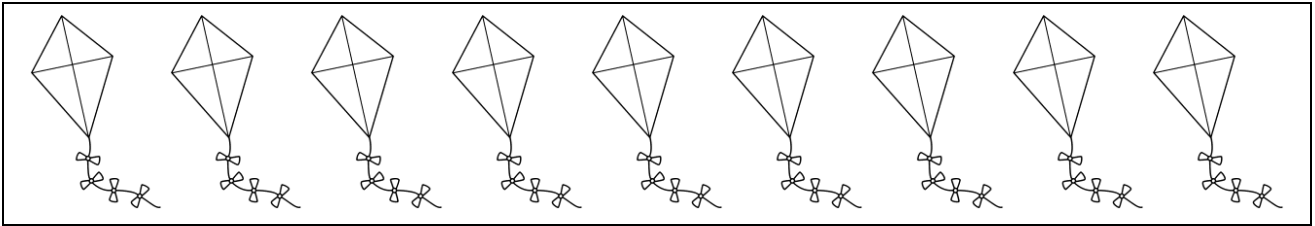
3) Make a group of ten objects and write the number:

(1)



4) Subtract by striking off the given objects :

(2)



$$9 - 5 = \boxed{}$$

5) Find the sum by counting forward on the number strip :

(2)

$$4 + 3 = \boxed{}$$

6) Fill in the boxes :

(2)

$$8 - \underline{\quad} = \boxed{}$$

3

$$5 - \underline{\quad} = \boxed{}$$

Q V] Do as directed:

1) Look at the given numbers and fill in the boxes:

(5)

68	
67	65
66	
65	
64	
63	62
62	
61	
60	

2) Complete the addition by writing the correct number in the boxes:

(3)

$$12 + 3 = \underline{1} \text{ tens} + \underline{2} \text{ units} + \underline{3} \text{ units}$$

$$= \underline{\quad} \text{ tens} + \underline{\quad} \text{ units}$$

$$= \underline{\quad}$$

3) Add :

$$\text{a) } \begin{array}{r} 16 \\ + 3 \\ \hline \end{array}$$

$$\text{b) } \begin{array}{r} 15 \\ + 2 \\ \hline \end{array}$$

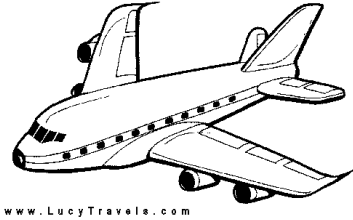

$$+ 3$$

$$+ 2$$

Q VI) Do as directed:

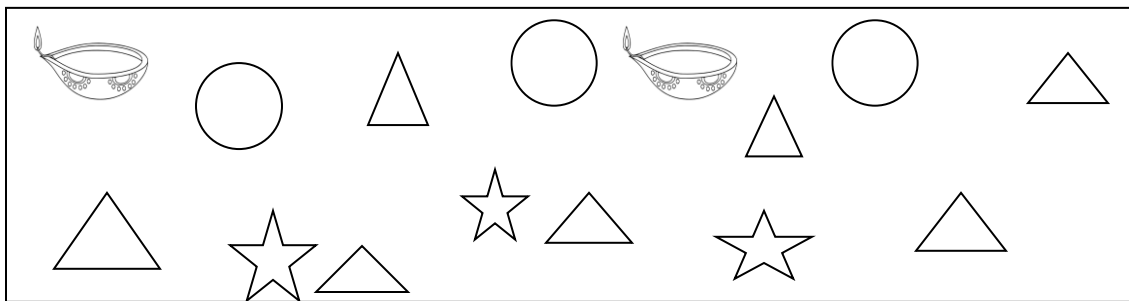
1) Tick (✓) the one that takes less time to travel and (✗) the one that travel takes more time to travel :

(2)



www.LucyTravels.com

2) Observe the different objects. Count and write how many:




3) Observe the picture and answer the questions:

(3)

- a) Number of balloons –
- b) Number of children not wearing caps –
- c) Number of children wearing caps –

4) Color as many objects as the given number:

(2)



All the best

QIA] Fill in the blanks : (2)

- 1) Monday, _____ Wednesday.
- 2) _____ month comes before September.

QIB] Circle the correct answer : (2)

- 1) The greatest number among 92, 73 & 99
a) 73 b) 92 c) 99
- 2) The month with the least number of letters in its name
a) April b) July c) May

QIIA] Write the number names for : (2)

- 1) 105 - _____
- 2) 126 - _____

QIIB] Complete the table : (2)

- 1) $5 \times 3 =$ _____
- 2) $4 \times 6 =$ _____

QIIC] Match the column : (2)

- | A | B |
|-----------------|-------|
| 1) $8 - 3$ | a) 42 |
| 2) $7 + 0$ | b) 5 |
| 3) 4 tens 2 | c) 45 |
| 4) 5×9 | d) 7 |

Ans : a) _____ b) _____ c) _____ d) _____

ALL THE BEST